

First Grade Supply List

Hello Future First Grade Parents,
The following is a list of supplies your child will use throughout the school year. Please bring them on the first day of school. Also, please sure all supplies are labeled. For some of the items, we have provided an Amazon link to refer to.

Thank you,
The First Grade Team

- ONLY 1 Large Pencil Pouch (no pencil boxes)
- 5 Labeled Number 2 Pencils
- 2 Large Glue Sticks
- 1 Pack of 24 Count Crayola Crayons
- 1 Labeled Plastic Crayon Box <https://a.co/d/hsBTaHC>
- 1 Pack of Colored Pencils
- 2 Yellow (ONLY) Highlighters
- 1 White Polymer Eraser
- 1 Blunt Tip Scissors
- 2 Packs of 3x5 Index Cards
- 1 Index Card box with 5 Labeled dividers: Unit 1, Unit 2, Unit 3, Unit 4, Unit 5 <https://a.co/d/hh74YX2>
- 1 Plastic File Folder <https://a.co/d/3SJ8PL8>
- Chairback Pocket Chart with Name Tag
<https://a.co/d/IOCilwk>
- 1 Tissue Box
- 1 Packet of Baby Wipes
- 1 Roll of Paper Towel

First Grade Supply List

Continued...

Folders

Your child needs the following slicker (plastic) folders labeled with his/her name and subject:

- Orange: Home Folder
- Green: Classwork
- Red: Religion
- Purple: Art
- Any color/Pattern- Music

Your child needs the following Plastic Duotangs (folder with the 3 prongs inside) labeled with name and subject:

- Red: Fluency Folder
- Any Color: P.E.

Notebooks

The school will provide primary composition notebooks and writing journals at the beginning of the year.

NAME: _____ DATE: _____

DIRECTIONS Read the text. Answer the questions.

Mom said I can buy a pet! She said a mouse is fun. A mouse likes to play. It does not take a lot of work.

SCORE

1. 😊 😐

2. 😊 😐

3. 😊 😐

4. 😊 😐

____ / 4

Total

1. Who tells the child she can buy a pet?

- (A) the girl
(B) the mouse
(C) Mom

3. Which word rhymes with  ?

- (A) mouse
(B) mice
(C) moose

2. What kind of pet is a mouse?

- (A) bad
(B) fun
(C) fast

4. What does the word *buy* mean?

- (A) pay for
(B) give
(C) like

NAME: _____ DATE: _____

DIRECTIONS Read the text. Answer the questions.SCORE

1. 😊 😐

I read a book about mice. I must get mouse food.
I can get it at the pet store. My mouse will need
water, too.


2. 😊 😐

3. 😊 😐

1. Where can the child
get mouse food?

- (A) at home
(B) at the pet store
(C) at a farm

4. 😊 😐

3. Which word starts
with the same sound
as  ?

- (A) water
(B) pet
(C) more

___ / 4

Total

2. What should the child
give a mouse to eat?

- (A) mouse food
(B) meat and bread
(C) eggs

4. What is a *mouse*?

- (A) a toy
(B) a color
(C) an animal

NAME: _____ DATE: _____

DIRECTIONS

Read the text. Answer the questions.

I will buy a cage. Pet mice live in cages. I will help keep the cage clean. Mice like to wash up, too!

SCORE

1. 😊 😞

2. 😊 😞

3. 😊 😞


4. 😊 😞

____ / 4

Total

1. Where do pet mice live?

- (A) hole
(B) cage
(C) cave

3. What is the correct spelling for  ?

- (A) mis
(B) mice
(C) mise

2. What will she do if the cage is not clean?

- (A) buy a cage
(B) wash the mouse
(C) wash the cage

4. What is a *cage*?

- (A) a place to wash a mouse
(B) a store for a mouse
(C) a place for an animal to live

NAME: _____

DATE: _____

A New Home

The white mouse sat in a big cage. Then a girl said, "I want that one!" A big hand picked up the mouse and put it in a box. The mouse soon felt happy. He had a new cage and a new friend!



NAME: _____ DATE: _____

DIRECTIONS Read "A New Home." Answer the questions.

| | |
|--|--|
| <p>1. Where do you think the mouse was?</p> <p>(A) on a farm</p> <p>(B) in a pet store</p> <p>(C) in a school</p> | <p>3. How do you think the mouse felt at the end?</p> <p>(A) sad</p> <p>(B) happy</p> <p>(C) fat</p> |
| <p>2. Why is the mouse put into the box?</p> <p>(A) so that the girl could take him home</p> <p>(B) so that the mouse could eat</p> <p>(C) so that the girl could get a toy</p> | <p>4. What does the title mean?</p> <p>(A) The mouse got a new place to live.</p> <p>(B) The girl got a new pet.</p> <p>(C) The mouse left the store.</p> |

SCORE

1. 😊 😐

2. 😊 😐

3. 😊 😐

4. 😊 😐

___ / 4

Total

NAME: _____ DATE: _____

SCORE

___ / 4



Reread "A New Home."



Think about what the girl does to pick her new pet.



Write about what the girl does.

Handwriting practice lines consisting of solid top and bottom lines with a dashed middle line. There are 10 sets of these lines provided for writing.

NAME: _____ DATE: _____

DIRECTIONS Read the text. Answer the questions.

Apples are good to eat. Have you seen an apple tree? You can pick your apples in the fall. That is when they are ripe.

SCORE

1. 😊 😐

2. 😊 😐

3. 😊 😐

4. 😊 😐

____ / 4

Total

1. Where do apples grow?

- (A) on a bush
(B) on a tree
(C) on a farm

3. Which word has the word *all* in it?

- (A) tree
(B) fall
(C) ripe

2. When can you pick apples?

- (A) in the fall
(B) in the summer
(C) in the spring

4. What does the word *ripe* mean?

- (A) red
(B) older
(C) ready

NAME: _____ DATE: _____

DIRECTIONS Read the text. Answer the questions.SCORE

1. 😊😊

Cut an apple in two. The middle is called the *core*.
Look at a seed. A big tree can grow from that
little seed!


2. 😊😊

3. 😊😊

1. What do trees
grow from?

- (A) a core
 (B) a seed
 (C) a tree

4. 😊😊

3. Which word rhymes
with ?

- (A) core
 (B) apple
 (C) seed

___ / 4

Total

2. How many pieces is
the apple cut into?

- (A) It is not cut.
 (B) three
 (C) two

4. What is the middle of
an apple called?

- (A) a stem
 (B) a seed
 (C) a core

NAME: _____ DATE: _____

DIRECTIONS

Read the text. Answer the questions.

You can eat an apple. You also can make applesauce. Apples can be made into juice. But an apple pie is best!

SCORE

1. 😊 😐

2. 😊 😐

3. 😊 😐

4. 😊 😐

____ / 4

Total

1. What are some ways to eat apples?

- (A) in a sauce or in a pan
- (B) as juice or in a glass
- (C) as juice or as sauce

3. Which word is made up of two words?

- (A) apple
- (B) into
- (C) best

2. What does the writer like best?

- (A) apple juice
- (B) apple pie
- (C) raw apples

4. What is an *apple*?


- (A) a fruit
- (B) a season
- (C) a drink

NAME: _____

DATE: _____

Bobbing for Apples

Get ready for a fun game! This is what to do. First, get a big tub. Put water in the tub. Add lots of apples. Take turns with some friends. Try to get an apple out. No hands! You have to bite your apple. Have fun bobbing for apples!



NAME: _____ DATE: _____

DIRECTIONS

Read "Bobbing for Apples." Answer the questions.

SCORE

1. What might happen in the game?

- (A) You might get wet.
- (B) You might eat a lot.
- (C) You might make a pie.

3. What does the word *bobbing* mean?

- (A) eating
- (B) moving your head up and down
- (C) jumping

1. 😊 😐

2. 😊 😐

3. 😊 😐

4. 😊 😐

___ / 4

Total

2. What do you need for this game?

- (A) water, a big tub, and a mop
- (B) water, little pans, and apples
- (C) water, a big tub, and apples

4. What is the main idea?

- (A) how to play the game
- (B) how to clean apples
- (C) how to fill a tub

NAME: _____ DATE: _____

SCORE

___ / 4



Reread "Bobbing for Apples."



Think about how to bob for apples.



Write about how to play the game.

Handwriting practice lines consisting of solid top and bottom lines with a dashed middle line. There are 10 sets of these lines provided for writing.

NAME: _____

DIRECTIONS

Solve each problem.

SCORE

1. Count how many.



2. How many in all?



3. Three are crossed off. How many are left?




4. $1 + \square = 2$

5. Color the circle.



6. Circle the longer snake.



7. Count how many. Record with tally marks.



| Item | Tally |
|------|-------|
| | |
| | |

8. Draw a circle around the group that has less.



1. 😊 😞

2. 😊 😞

3. 😊 😞

4. 😊 😞

5. 😊 😞

6. 😊 😞

7. 😊 😞

8. 😊 😞

____ / 8

Total

NAME: _____

DIRECTIONS Solve each problem.

SCORE


1. 😊 😐

1 Write the number before and after 6.

| Before | Number | After |
|--------|--------|-------|
| | 6 | |

2. 😊 😐

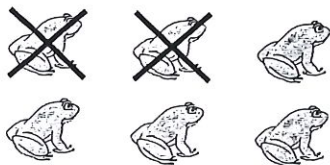
2 How many in all?



4. 😊 😐

5. 😊 😐

3 Two are crossed off. How many are left?



7. 😊 😐


8. 😊 😐

4 Continue the pattern.

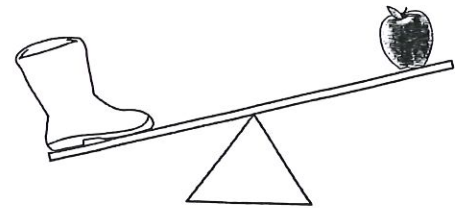
A B A B A _____

5 Count the sides.

_____ sides



6 Circle the heavier object.



7 Number of Home Runs

| Marc | Ramon | Jamal |
|------|-------|-------|
| 7 | 4 | 15 |

How many home runs did Ramon hit?

8 I am the number that comes after 3. What number am I?

____ / 8

Total

NAME: _____

DIRECTIONS

Solve each problem.

1. Write the numeral for six.

2. How many in all?



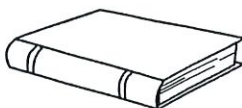
3. One is crossed off. How many are left?



4. $4 - \square = 2$

5. Will the object stack?

Circle: yes no



6. What time is it?
_____ o'clock



7. Pencil Colors

| | |
|-------|--|
| Red | |
| Green | |
| Blue | |

How many pencils are blue?

8. Mom has 3 flowers. I give her 1 more. How many flowers does she have in all?

SCORE

1. 😊 😞

2. 😊 😞

3. 😊 😞

4. 😊 😞

5. 😊 😞

6. 😊 😞

7. 😊 😞

8. 😊 😞

____ / 8

Total

NAME: _____

DIRECTIONS

Solve each problem.

SCORE

1. 😊 😐

2. 😊 😐

3. 😊 😐

4. 😊 😐

5. 😊 😐

6. 😊 😐

7. 😊 😐


8. 😊 😐

____ / 8
Total

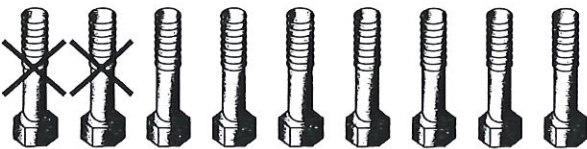
1. Circle the larger number.

3 8

2. How many in all?



3. Two are crossed off. How many are left?




4. Write the missing sign.

2 1 = 3

5. Draw a line of symmetry.



6. Circle the container that holds more.



7. Favorite Ice Cream

| | |
|----------------------|--|
| Chocolate Ice Cream | |
| Strawberry Ice Cream | |

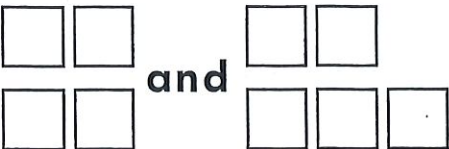
How many children like strawberry ice cream?


8. Willis has 2 cats. His mom brings home 1 more. How many cats does Willis have now?

NAME: _____


DIRECTIONS Solve each problem.

1. Write the numeral for two.

2. How many in all?


3. Four are crossed off. How many are left?


4. Circle the number sentences that equal four.
 $1 + 3$ $2 + 4$
 $2 + 2$ $4 + 0$

5. Circle the object that looks like the solid.


6. Is the object shorter than your arm?
 Circle: yes no



7.

| | | | | |
|------------------|------|------|------|-----|
| | | | | |
| | | | | |
| | | | | |
| | | | | |
| | | | | |
| | | | | |
| | | | | |
| Number of Awards | Sue | Paul | Rory | Chu |
| 6 | | | | |
| 5 | | | | |
| 4 | | | | |
| 3 | | | | |
| 2 | | | | |
| 1 | | | | |
| 0 | | | | |
| | Name | | | |

How many awards does Paul have?

8. How many wheels are on 2 tricycles?

SCORE

1. 😊 😞

2. 😊 😞

3. 😊 😞

4. 😊 😞

5. 😊 😞

6. 😊 😞

7. 😊 😞

8. 😊 😞

____ / 8

Total

NAME: _____

DIRECTIONS

Solve each problem.

SCORE

1. 😊 😐



Write the numeral.


| | | | | | | | | | |
|---|---|---|---|---|---|---|---|---|---|
| ● | ● | ● | ● | ● | ● | ● | ● | ● | ● |
| ● | ● | | | | | | | | |

2. 😊 😐

3. 😊 😐



Add. How many in all?



4. 😊 😐

$$\boxed{4} + \boxed{3} = \boxed{}$$

5. 😊 😐



Subtract. Cross off two. How many are left?



7. 😊 😐

$$\boxed{5} - \boxed{2} = \boxed{}$$

8. 😊 😐



Continue the pattern.

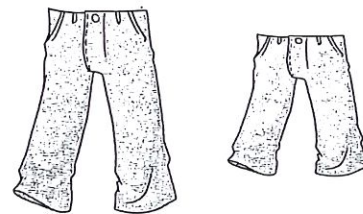
1 2 1 2 1 _____



Draw 4 fish inside the box.



Circle the shorter pants.



Count the tally marks. Write the numeral.



Irene gets an ice cream with 3 scoops on it. She eats 1 scoop. How many scoops does she have left?

____ / 8

Total

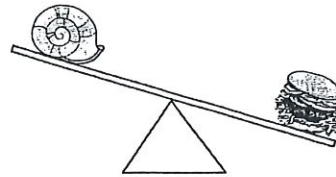
NAME: _____

DIRECTIONS Solve each problem.

1. How many sticks?



6. Circle the object that is heavier.



2. Add. How many in all?



$$\boxed{3} + \boxed{5} = \boxed{}$$

7. Favorite Subject

| | |
|---------|------|
| Math | |
| Reading | |
| Science | |

3. Subtract. Cross off two. How many are left?



$$\boxed{6} - \boxed{2} = \boxed{}$$

4. $2 - \boxed{} = 2$

5. Does the ball have any flat surfaces?

Circle: yes no



8. Write an addition number sentence using the numbers 1, 3, and 4.

SCORE

1.

2.

3.

4.

5.

6.

7.

8.

____ / 8

Total

NAME: _____

DIRECTIONS

Solve each problem.

SCORE




_/8

total

1. Write the number before and after 13.

| Before | Number | After |
|--------|--------|-------|
| | 13 | |

2. Add. How many in all?



$$\boxed{5} + \boxed{3} = \boxed{}$$

3. Subtract. Cross off two. How many are left?



$$\boxed{4} - \boxed{2} = \boxed{}$$

$$\begin{array}{r} 4 \\ + \\ \hline 3 \end{array}$$

5. Draw a square. Put a dot outside the square.

6. What time is it?
_____ o'clock



7. Favorite Activity

| Swings | Slide | Monkey Bars | Balance Beam |
|--------|-------|-------------|--------------|
| 8 | 5 | 7 | 2 |

How many children like the swings?

8. Jenny is last. Monique is first. Sara is in the middle. Write 1, 2, or 3 to show the order.

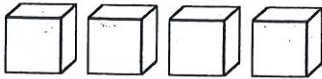
Sara Jenny Monique

NAME: _____

DIRECTIONS

Solve each problem.

1 Write the numeral.



2 Add. How many in all?



$$\boxed{3} + \boxed{3} = \boxed{}$$

3 Subtract. Cross off three. How many are left?



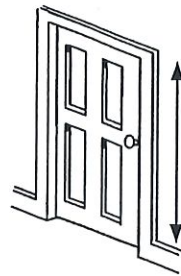
$$\boxed{7} - \boxed{3} = \boxed{}$$

$$\boxed{4} \quad 2 \quad \boxed{} \quad 2 = 4$$

5 Draw a circle.

6 Is a door shorter than your arm?

Circle: yes no



7 Favorite Recess Game

| | | | | | | | |
|-------|-------------|-------|---|---|---|---|---|
| Games | Hopscotch | ■ | ■ | | | | |
| | Handball | ■ | ■ | ■ | ■ | ■ | |
| | Tetherball | ■ | ■ | | | | |
| | Four Square | ■ | ■ | ■ | | | |
| | | 0 | 1 | 2 | 3 | 4 | 5 |
| | | Votes | | | | | |

How many children like hopscotch?

8 Which has more legs: a bird or a dog?

SCORE

1. 😊 😞

2. 😊 😞

3. 😊 😞

4. 😊 😞

5. 😊 😞

6. 😊 😞

7. 😊 😞

8. 😊 😞

_____/8

Total

NAME: _____

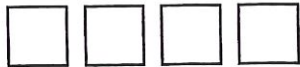
DIRECTIONS

Solve each problem.

SCORE

1. 😊 😊

1. Count the squares. Draw 1 more. Write how many squares there are now.



2. 😊 😊

5. Is the pencil on the right or on the left?




3. 😊 😊

2. Add. How many in all?



6. Circle the container that holds more.



4. 😊 😊

$$\boxed{2} + \boxed{7} = \boxed{}$$

7. Favorite Type of Movie

| Funny | Cartoon | Scary | 3-D |
|-------|-----------------|-------|-----------------|
| | | | |

5. 😊 😊

3. Subtract. Cross off two. How many are left?



How many children like funny movies?

6. 😊 😊

$$\boxed{6} - \boxed{2} = \boxed{}$$

7. 😊 😊

4. Write the missing number.

8. What day comes after Tuesday?


$$0 + \boxed{} = 4$$

___ / 8

Total

Name _____

Spring 120 Chart



Color the even and odd numbers on the 120 chart.



Even



Odd

| | | | | | | | | | |
|-----|-----|-----|-----|-----|-----|-----|-----|-----|-----|
| 1 | 2 | 3 | 4 | 5 | 6 | 7 | 8 | 9 | 10 |
| 11 | 12 | 13 | 14 | 15 | 16 | 17 | 18 | 19 | 20 |
| 21 | 22 | 23 | 24 | 25 | 26 | 27 | 28 | 29 | 30 |
| 31 | 32 | 33 | 34 | 35 | 36 | 37 | 38 | 39 | 40 |
| 41 | 42 | 43 | 44 | 45 | 46 | 47 | 48 | 49 | 50 |
| 51 | 52 | 53 | 54 | 55 | 56 | 57 | 58 | 59 | 60 |
| 61 | 62 | 63 | 64 | 65 | 66 | 67 | 68 | 69 | 70 |
| 71 | 72 | 73 | 74 | 75 | 76 | 77 | 78 | 79 | 80 |
| 81 | 82 | 83 | 84 | 85 | 86 | 87 | 88 | 89 | 90 |
| 91 | 92 | 93 | 94 | 95 | 96 | 97 | 98 | 99 | 100 |
| 101 | 102 | 103 | 104 | 105 | 106 | 107 | 108 | 109 | 110 |
| 111 | 112 | 113 | 114 | 115 | 116 | 117 | 118 | 119 | 120 |

I CAN SKIP COUNT BY 2'S

| | | | | | | | | | |
|----|----|----|----|----|----|----|----|----|-----|
| 1 | 2 | 3 | 4 | 5 | 6 | 7 | 8 | 9 | 10 |
| 11 | 12 | 13 | 14 | 15 | 16 | 17 | 18 | 19 | 20 |
| 21 | 22 | 23 | 24 | 25 | 26 | 27 | 28 | 29 | 30 |
| 31 | 32 | 33 | 34 | 35 | 36 | 37 | 38 | 39 | 40 |
| 41 | 42 | 43 | 44 | 45 | 46 | 47 | 48 | 49 | 50 |
| 51 | 52 | 53 | 54 | 55 | 56 | 57 | 58 | 59 | 60 |
| 61 | 62 | 63 | 64 | 65 | 66 | 67 | 68 | 69 | 70 |
| 71 | 72 | 73 | 74 | 75 | 76 | 77 | 78 | 79 | 80 |
| 81 | 82 | 83 | 84 | 85 | 86 | 87 | 88 | 89 | 90 |
| 91 | 92 | 93 | 94 | 95 | 96 | 97 | 98 | 99 | 100 |

I CAN SKIP COUNT BY 10'S

| | | | | | | | | | |
|----|----|----|----|----|----|----|----|----|-----|
| 1 | 2 | 3 | 4 | 5 | 6 | 7 | 8 | 9 | 10 |
| 11 | 12 | 13 | 14 | 15 | 16 | 17 | 18 | 19 | 20 |
| 21 | 22 | 23 | 24 | 25 | 26 | 27 | 28 | 29 | 30 |
| 31 | 32 | 33 | 34 | 35 | 36 | 37 | 38 | 39 | 40 |
| 41 | 42 | 43 | 44 | 45 | 46 | 47 | 48 | 49 | 50 |
| 51 | 52 | 53 | 54 | 55 | 56 | 57 | 58 | 59 | 60 |
| 61 | 62 | 63 | 64 | 65 | 66 | 67 | 68 | 69 | 70 |
| 71 | 72 | 73 | 74 | 75 | 76 | 77 | 78 | 79 | 80 |
| 81 | 82 | 83 | 84 | 85 | 86 | 87 | 88 | 89 | 90 |
| 91 | 92 | 93 | 94 | 95 | 96 | 97 | 98 | 99 | 100 |

I CAN SKIP COUNT BY 5'S

| | | | | | | | | | |
|----|----|----|----|----|----|----|----|----|-----|
| 1 | 2 | 3 | 4 | 5 | 6 | 7 | 8 | 9 | 10 |
| 11 | 12 | 13 | 14 | 15 | 16 | 17 | 18 | 19 | 20 |
| 21 | 22 | 23 | 24 | 25 | 26 | 27 | 28 | 29 | 30 |
| 31 | 32 | 33 | 34 | 35 | 36 | 37 | 38 | 39 | 40 |
| 41 | 42 | 43 | 44 | 45 | 46 | 47 | 48 | 49 | 50 |
| 51 | 52 | 53 | 54 | 55 | 56 | 57 | 58 | 59 | 60 |
| 61 | 62 | 63 | 64 | 65 | 66 | 67 | 68 | 69 | 70 |
| 71 | 72 | 73 | 74 | 75 | 76 | 77 | 78 | 79 | 80 |
| 81 | 82 | 83 | 84 | 85 | 86 | 87 | 88 | 89 | 90 |
| 91 | 92 | 93 | 94 | 95 | 96 | 97 | 98 | 99 | 100 |

